




4. How much is left?



5. How much in each piggy bank?



_____ p



_____ p



_____ p



_____ p



_____ p