





Who Has the Most Money?

Amazing Fact

The 1p, 2p, 5p, 10p, 20p and 50p coins can be put together to make a picture of the Royal Shield.

Challenge

Add the coins in each purse together.




Now, order the purses from the most to the least amount in the boxes.

You could also try to find out:

- who the richest person in the world is;
- which country has the most billionaires;
- which are the poorest countries.

Who Has the Most Money? Answers

a.




45p

b.




£1.17

c.



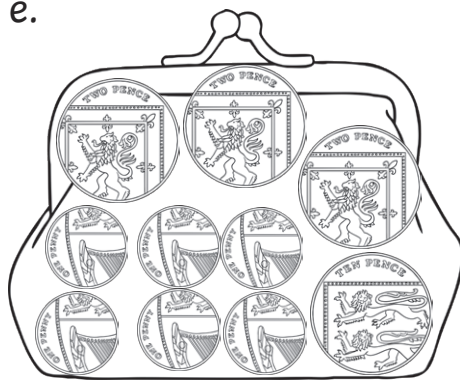
47p

d.



70p

e.



22p

f.



£2.70

Now, order the purses from the most to the least amount in the boxes.

| | | | | | |
|----------|----------|----------|----------|----------|----------|
| f | b | d | c | a | e |
|----------|----------|----------|----------|----------|----------|